

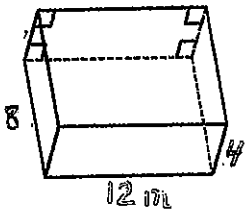
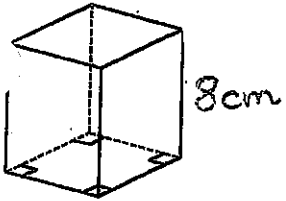
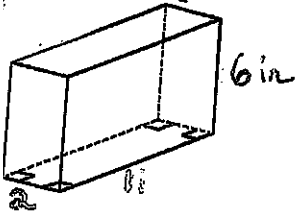
Geometry Unit: Surface Area

NAME: _____

DATE: _____

Directions: For each prism:

- ① Sketch and label sides or net
- ② Calculate surface area



4.

